


Terzen – Dreiklänge

Arbeitsblatt 2


Name _____

Bestimme folgende Terzen: (k3 oder g3)




g3 k3 k3 g3 g3 g3 g3 k3

Notiere die entsprechenden Terzen aufwärts:



g3 k3 g3 k3 k3 g3 k3 g3


Bestimme folgende Dreiklänge: Akkordsymbol: Dur > GrundTon (gross geschrieben), Moll > GT+m



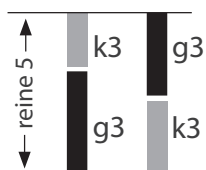
GT
Grundton

F Em Cm A Gm B^bm A^b H

Notiere folgende Dreiklänge:



C Dm G Fm Hm Em F#m B^b



Dur Moll

GT HT



1 1/2

3



k3 (nur 1 schw. Taste)

2

4



gr3

